

Multiply double with an array

Grade 3 Multiplication Worksheet

For each multiplication equation, draw a square table of boxes and solve the equation.

$$3 \times 3 = \underline{\quad}$$

$$5 \times 5 = \underline{\quad}$$

$$4 \times 4 = \underline{\quad}$$

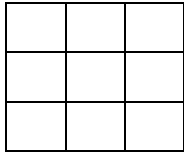
$$2 \times 2 = \underline{\quad}$$

$$7 \times 7 = \underline{\quad}$$


$$6 \times 6 = \underline{\quad}$$

Answers

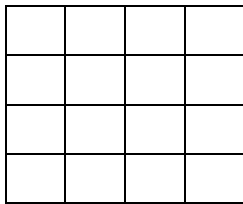
$$3 \times 3 = 9$$



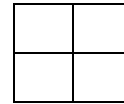
$$5 \times 5 = 25$$




$$4 \times 4 = 16$$



$$2 \times 2 = 4$$



$$7 \times 7 = 49$$



$$6 \times 6 = 36$$

